













LES MESURES DE MASSES

Classe les animaux suivants du plus léger au plus lourd et indique sous chacun son poids : *1 g, 5 g, 40 g, 300 g, 450 g, 5 kg, 200 kg, 500 kg, 750 kg, 1500 kg, 2500 kg, 4500 kg.*

1	2	3	4
5	6	7	8
9	10	11	12













Prénom : _____

 <p>moustique</p>	 <p>papillon</p>	 <p>souris</p>	 <p>rat</p>
 <p>écureuil</p>	 <p>chat</p>	 <p>lion</p>	 <p>girafe</p>
 <p>bison</p>	 <p>rhinocéros</p>	 <p>hippopotame</p>	 <p>éléphant</p>

Mathématiques

Date : . . / . . / . .

Solution :

											
1 g	5 g	40 g	300 g	450 g	5 kg	200 kg	500 kg	750 kg	1 500 kg	2 500 kg	4 500 kg

Prénom :